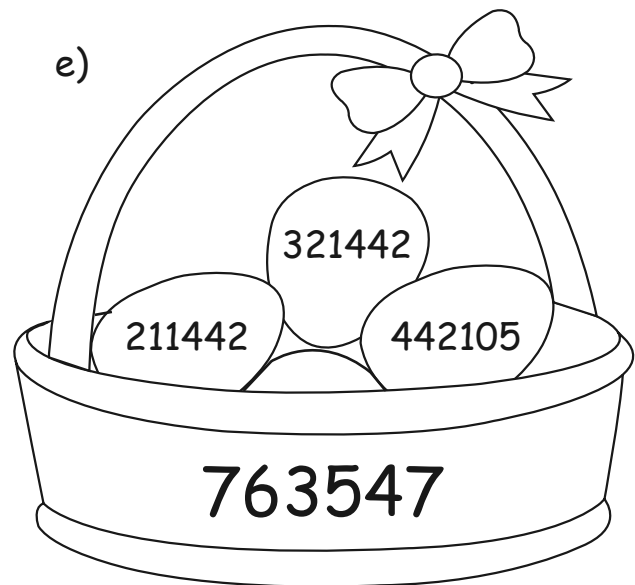
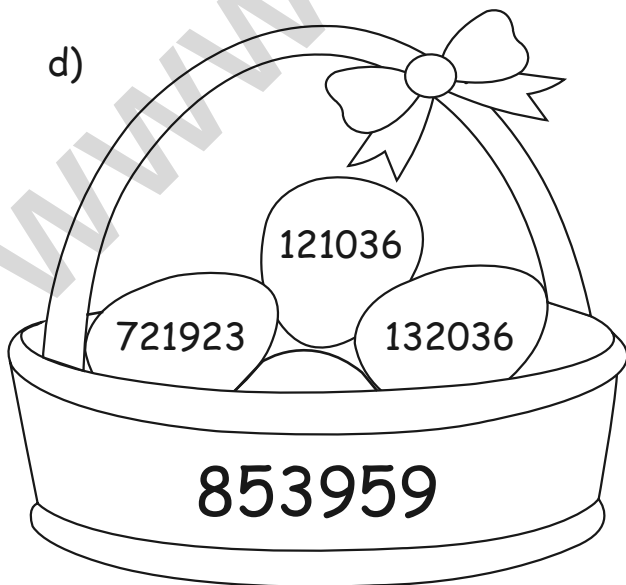
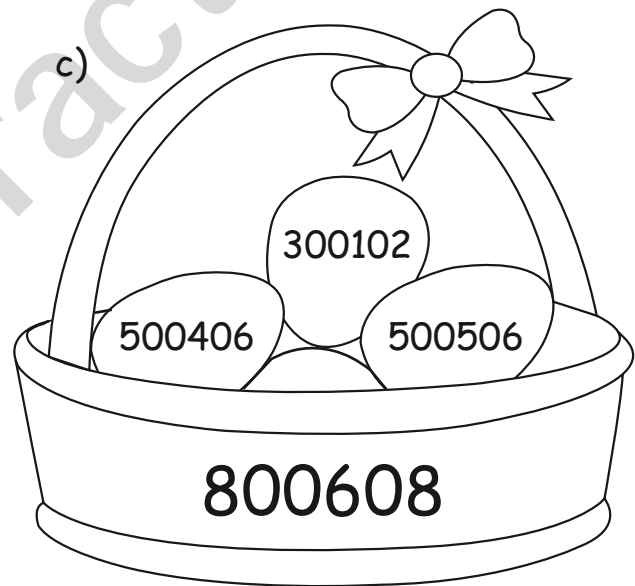
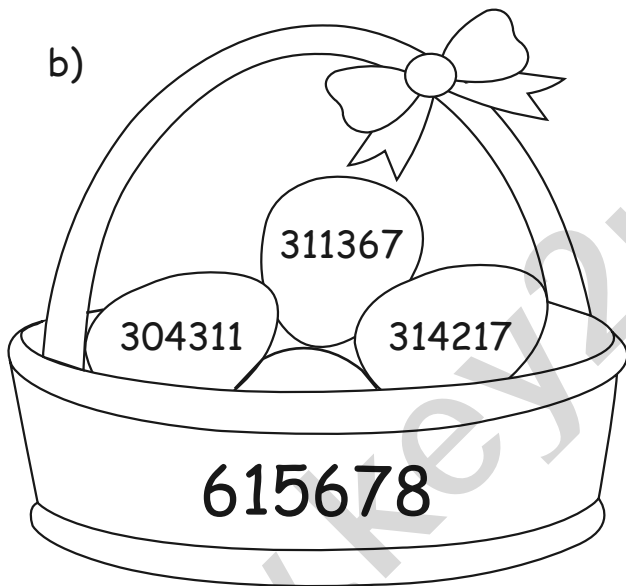
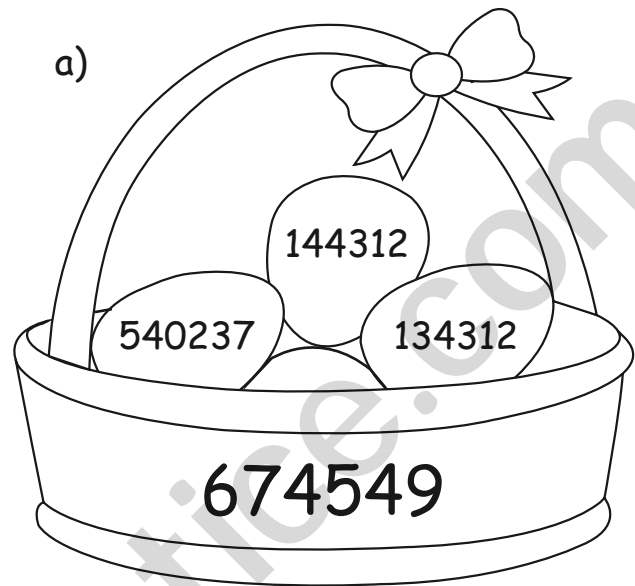



Addition Without Regrouping

Colour the eggs which add upto the number on the basket in each of the following.



Missing Digits

Find the missing digits in each question (they may be different digits) and fill the boxes.

$$\begin{array}{r} 712356 \\ + 104872 \\ \hline 817228 \end{array}$$

$$\begin{array}{r} 20078 \\ + 9173 \\ \hline 29691 \end{array}$$

$$\begin{array}{r} 4608 \\ + 157 \\ \hline 5712 \end{array}$$

$$\begin{array}{r} 3562 \\ + 7483 \\ \hline 8395 \end{array}$$

$$\begin{array}{r} 207758 \\ + 1284 \\ \hline 2032 \end{array}$$

$$\begin{array}{r} 35240 \\ 43240 \\ \hline 165 \end{array}$$

$$\begin{array}{r} 62415 \\ + 139 \\ \hline 7601 \end{array}$$