


Addition (Without Regrouping)

Read the statements carefully and find the correct answer.

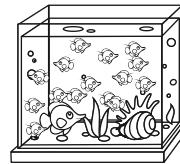
Find the total number of fish in both the aquariums.

Aquarium 1



48 fish

Aquarium 2



21 fish

Total number of fish = 69

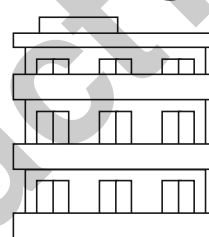
a) Find the total number of families in both the buildings.

Building 1



50 families

Building 2




42 families

Total number of families = _____


b) Find the total number of animals in both the farm houses.

Farm house 1



35 animals

Farm house 2



81 animals

Total number of animals are _____


c) Find the total number of fruits in both the baskets.

Basket 1



53 fruits

Basket 2

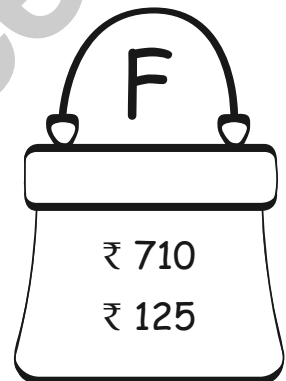


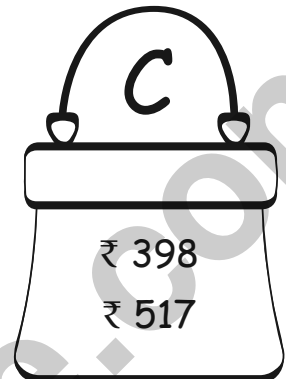
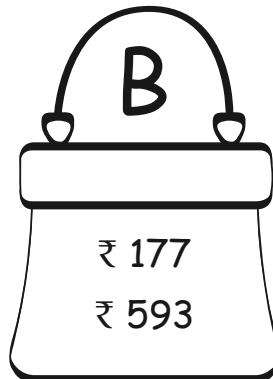
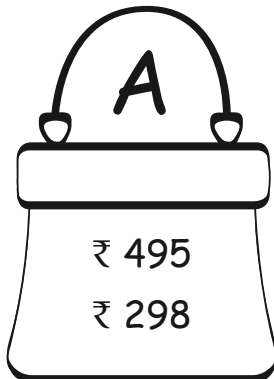


32 fruits

Total number of fruits = _____

Addition

There are six purses having different amounts. Based on the amount given in each purse answer the following.



Bag with total amount of ₹ 770 =

B

a) Total amount of money in bag 'D' =

b) Bag having total money less than ₹ 700 =

c) Which bag has more money, Bag A and Bag B? =

d) Bag with minimum amount of money =

e) Bag with maximum amount of money =

f) Bag with total money greater than ₹ 900 =

g) Bag with total money between ₹ 700 and ₹ 800 =