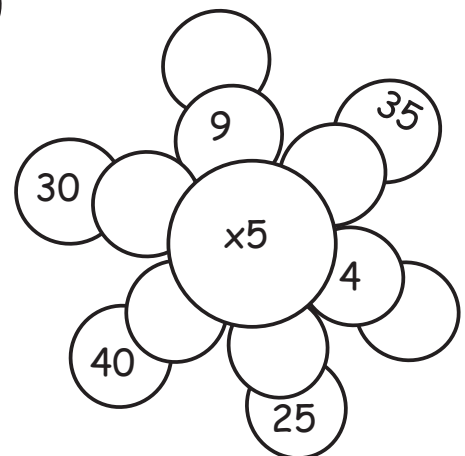
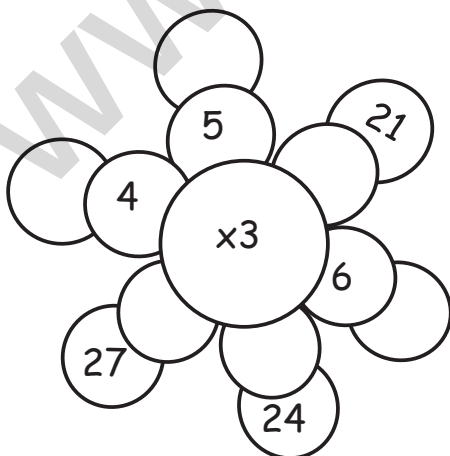
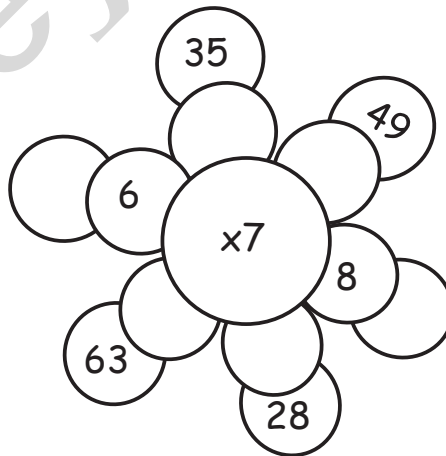
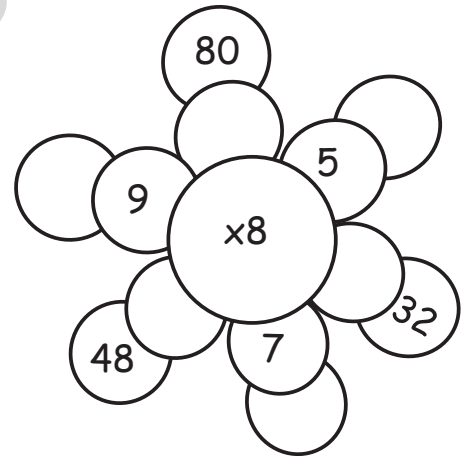
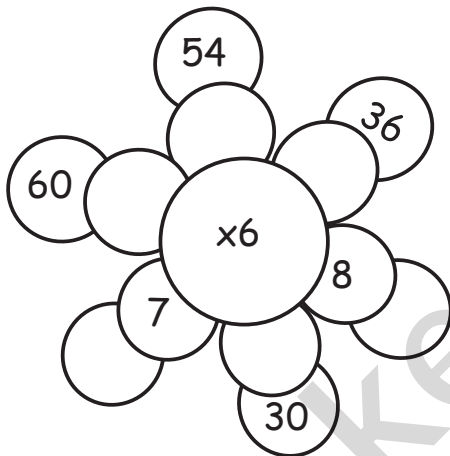
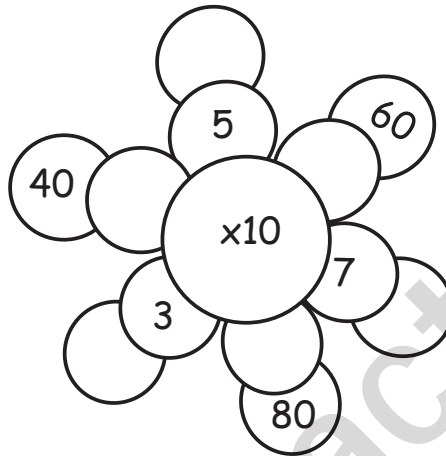
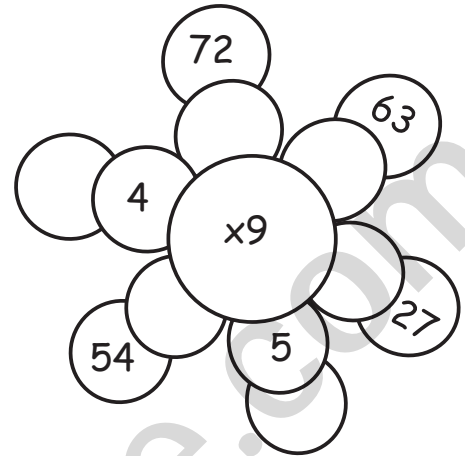
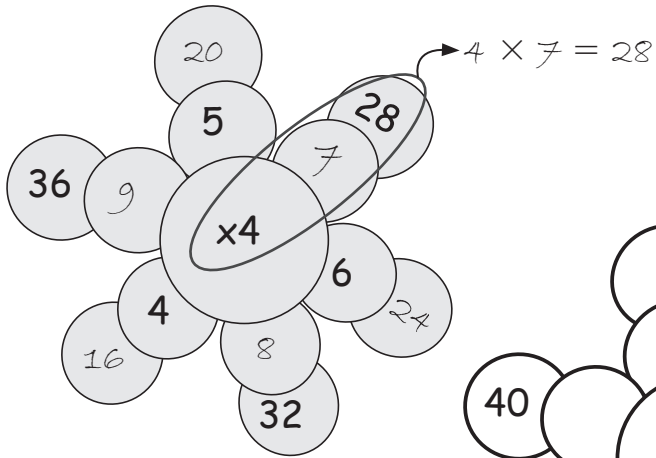


Multiplication Tables (1-10)

Use multiplication tables to fill in the missing numbers.
(Refer the solved example)



Multiplication (Without Regrouping)

Find the product.

①

H	T	O
4	2	3
x		2
<hr/>		
8	4	6

$2 \times 4 = 8$ $2 \times 2 = 4$ $2 \times 3 = 6$

a)

H	T	O
2	1	2
x		4
<hr/>		

b)

H	T	O
6	4	3
x		2
<hr/>		

c)

H	T	O
1	2	2
x		4
<hr/>		

d)

H	T	O
1	3	3
x		3
<hr/>		

e)

H	T	O
3	3	1
x		3
<hr/>		

f)

H	T	O
3	4	2
x		2
<hr/>		

g)

H	T	O
1	1	2
x		4
<hr/>		

h)

H	T	O
3	1	1
x		5
<hr/>		

i)

H	T	O
3	4	3
x		2
<hr/>		

j)

H	T	O
2	3	2
x		3
<hr/>		

k)

H	T	O
3	1	2
x		4
<hr/>		