


Multiplication Fact

Observe the given cards. Understand the solved example carefully and find the answers of the given question accordingly.




Take 3 cards Total number of dots

3 times 2 = 6 6 times 2 = 9 times 2 =


5 times 2 = 8 times 2 = 7 times 2 =

Each cards has 2 dots



4 times 3 = 2 times 3 = 8 times 3 =

7 times 3 = 5 times 3 = 10 times 3 =



5 times 4 = 10 times 4 = 3 times 4 =

2 times 4 = 7 times 4 = 4 times 4 =

Multiplication Fact

Colour the correct option.

$$2 + 2 + 2 + 2$$

2 times 4



4 times 2



a) $4 + 4 + 4$

4 times 3



3 times 4



b) $1 + 1 + 1 + 1 + 1$

1×5



5×1



c) $5 + 5 + 5$

3 times 5



5 times 3



d) $3 + 3$

3×2



2×3



e) $4 + 4 + 4 + 4 + 4 + 4 + 4$

7×4



4×7

