
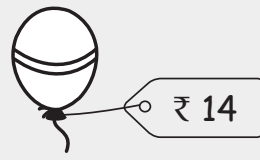


Addition

Read the statement carefully and tick the correct option.

Rama wants to purchase two things shown in the picture. How much money must she carry with her to buy both the things ?

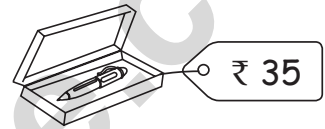
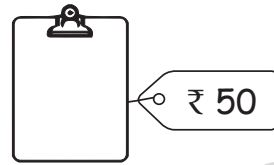


(i) ₹ 65

(ii) ₹ 66

(iii) ₹ 67

a) Meena wants to buy the exam pad and pencil box shown in the picture. What is the total cost of both the items ?


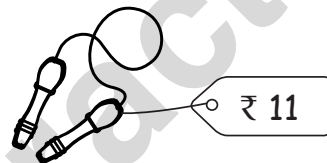


(i) ₹ 69

(ii) ₹ 85

(iii) ₹ 105

b) How much money should Soniya carry to buy the skipping rope and toy helicopter?

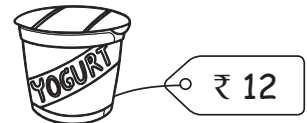



(i) ₹ 46

(ii) ₹ 36

(iii) ₹ 26

c) What will be the total cost of the pizza slice and yoghurt ?

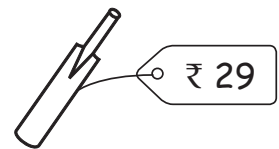
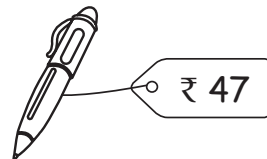


(i) ₹ 40

(ii) ₹ 45

(iii) ₹ 37

d) How much money must I carry to purchase the pen and bat shown in the picture ?

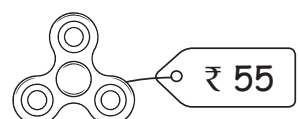


(i) ₹ 68

(ii) ₹ 75

(iii) ₹ 76

e) How much money would Meera need to purchase the two toys shown in the picture ?





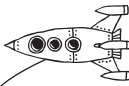





(i) ₹ 55

(ii) ₹ 83

(iii) ₹ 73

Comparison

Observe the values of given items and answer the following questions.

<p>Doll</p>  <p>₹ 60</p>	<p>Toy car</p>  <p>₹ 40</p>	<p>Toy plane</p>  <p>₹ 10</p>	<p>Candy</p>  <p>₹ 1</p>
<p>Pencil</p>  <p>₹ 2</p>	<p>Ball</p>  <p>₹ 12</p>	<p>Teddy bear</p>  <p>₹ 50</p>	<p>Spinner</p>  <p>₹ 12</p>

Which item is the most expensive ? Doll

a) Which two items have the same price ? _____

b) Which item is the cheapest ? _____

c) Which of item's given cost less than ₹ 10 ? _____

d) Which items cost more than ₹ 38 ? _____

e) How many balls can you buy for ₹ 24 ? _____

f) How many toy planes can you buy for ₹ 40 ? _____

g) Which item costs less than ₹ 60 but more than ₹ 45 ? _____