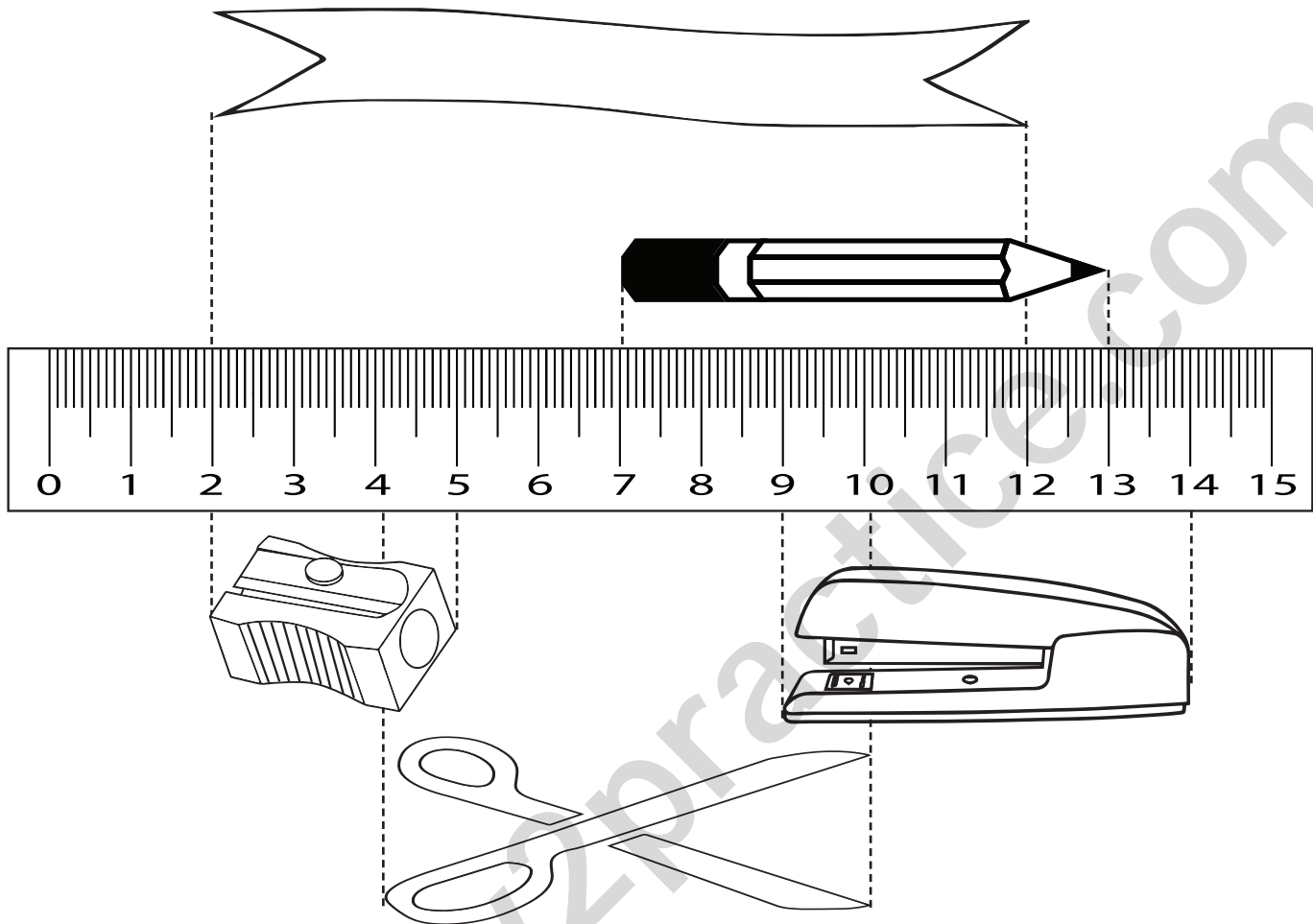


Measuring Units of Length

Observe the given picture carefully and write the answer accordingly.



Which two items are equal in length ? Scissors , Pencil

a) How much is sharpener shorter than the scissor ? _____

b) Which item is shorter than pencil but longer than sharpener ? _____


c) If length of pencil is increased by 1 cm , Which item becomes third longest ? _____

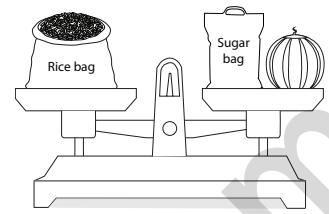
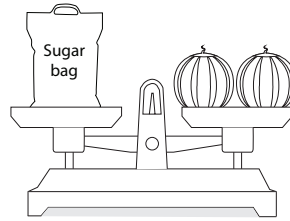

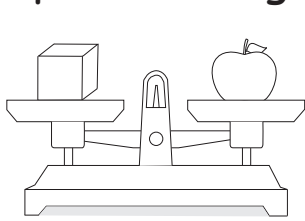
d) How much is scissors longer than stapler ? _____

e) Which item is the longest ? _____

f) If length of ribbon is decreased by 2 cm, is it still longer than the scissor ? _____

Measuring Weight

Observe the given picture carefully. If the weight of  is equal to 250g, then find the answers for each of the following.



a)

The weight of an apple is _____ g

b) The weight of a watermelon is _____ kg

c)

Which weighs more, watermelon or an apple? _____

Start




d)

Total weight of an apple and a watermelon is _____

e)

The weight of 2 watermelons is _____ kg



Finish

g)

The weight of a rice bag is _____ kg

f)

The weight of a sugarbag is _____ kg

