

# Profit or Loss

Amit's mother asked him to purchase some sweets. She gives him the list of sweets needed. Help him to calculate the bill.



$\frac{1}{2}$  kg Ladoo

₹ 100

a) 500 g Barfi

b)  $2\frac{1}{2}$  kg Cake


c) 200 g Halwa

d) 250 g Gujia

e)  $\frac{1}{4}$  kg Jalebi

f) Total amount to be paid

List  
of Sweets



# Profit or Loss

Make a list of fruits which you can buy if the cost of basket is fixed. (You have to buy atleast one fruit of each type).

Apple




₹ 45 per piece

Mango



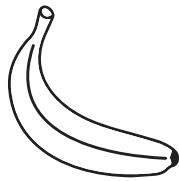
₹ 60 per piece

Pomegranate




₹ 75 per piece

Banana



₹ 10 per piece

Watermelon



₹ 120 per piece

1 Apple 45

1 Mango 60

1 Pomegranate 75

5 Bananas 50

1 Watermelon 120

---

₹ 350

---

