







# Tally Marks

Count the number of each item on Rishika's birthday buffet and fill in the table with tally marks. Then answer the questions that follow.

<b>Items</b>						
<b>Quantities</b>	<b>7</b>	<b>14</b>	<b>18</b>	<b>4</b>	<b>23</b>	<b>11</b>

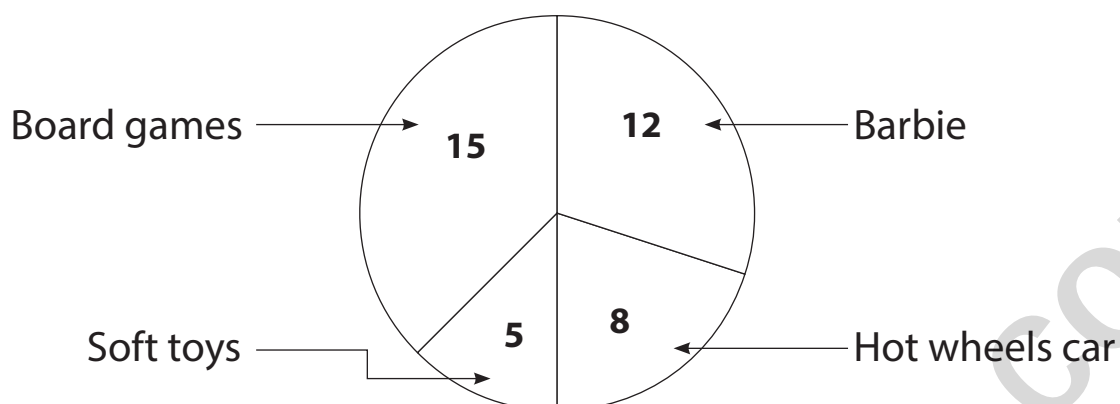
Items	Quantities	Tally Marks
Burgers 		
Doughnuts 		
Pastry 		
Pizza 		
Party hat 		
Gifts 		

a) Which item is present in largest quantity ?

b) Which item is present in the least quantity ?

# Pie Chart

Refer the following pie chart depicting sales of a toy shop.



a) What is the total number of toys sold ? .....

b) Which is the most and least popular toy ? .....

c) Complete the following table using the pie chart.

Toys	Sales as tally marks
Barbie 	
Hot wheels car 	
Soft toys 	
Board games 	
<b>Total</b>	