









Match the groups containing the same number of shapes.



7

The Perfect Smoothie

Date

You have found the recipe for the perfect smoothie. To make it, you have to gather the ingredients first.

Count and pick the correct group of fruits. One has been done for you.


Let me help you!
COUNT WITH ME!




6 Mangoes





10 Oranges



3 Strawberries



7 Pears



5 Pineapples



10

What's My Name?

Date

Find the number names of numbers 1 to 10 in the given word search. One has been done for you.



Write the missing letters to complete the number names.



F O U R

e

I V

a

T

f

I N

b

S I

g

E E

c

T N

h

E V

d

N

i

E G T

Mr. Astronaut needs your help in finding a way to reach different planets.

Write the following sets of numbers in ascending order towards the planets to guide him.



Imagine you are a bird flying in the sky. When you look down, you see various numbers in the area.

Identify them and write their number names. One has been done for you.



Fifty

50 Skipping Rope

Date

A group of friends is having a skipping rope contest. Help them count their jumps. **Observe the given sequence and write the next four numbers.**



c

Aashish

c

Geetanjali

a

Swati

d

Gautam

b

Anubhav

e

Kirti



POWER UP! WHICH FRIEND SKIPS THE ROPE THE MOST NUMBER OF TIMES?

WHICH FRIEND SKIPS THE ROPE THE LEAST NUMBER OF TIMES?